

# Parrot Resources

W.B 08.06.20 Page numbers at the bottom.

## Jack and the Beanstalk



Once upon a time, there was a boy called Jack. Jack lived in a cottage with his mother. They were very poor and they had a cow. One day, Jack's mother asked him to take the cow to market to sell. On the way, Jack met a man, who gave him some magic beans in return for the cow.



When Jack came home with the beans his mother was angry. She threw the beans out of the window and sent him to bed. The next morning, a giant beanstalk had grown in the garden! Jack climbed the very tall beanstalk.

When Jack finally reached the top, he saw an enormous castle. Jack went inside. Suddenly, Jack heard a loud noise and hid. A huge giant came into the room with a hen and a golden harp. "Fee, Fi, Fo, Fum, I smell the blood of an Englishman!" He shouted. The giant sat down at the table. "Lay!" said the giant and the hen laid an egg. "Sing!" said the giant. The harp sang and the giant fell asleep.





Jack jumped out of the cupboard and took the hen and the harp. As he ran, the harp shouted. The giant woke up and chased Jack. Jack climbed down the beanstalk and the giant followed him. As Jack got to the bottom of the beanstalk, he shouted, "Help!" Jack's mother came out with an axe.

She used it to chop the bottom of the beanstalk. The giant fell and crashed to the ground. He was never seen again. With the golden eggs and the magic harp, Jack and his mother lived happily ever after.



## Questions

1. What animal did Jack sell?
2. What grew in the garden?
3. What sent the giant to sleep?
4. What could the giant smell?
5. What did Jack's mother do to the beanstalk?
6. How do you know the beanstalk was very tall?
7. What two things were on the table in the castle?
8. Do you think the ending is a happy one for everyone in the story? Explain your answer.

## Answers

1. Jack sold a cow.
2. A beanstalk grew in the garden.
3. The harp singing sent the giant to sleep.
4. The giant said he could smell the blood of an Englishman.
5. Jack's mother chopped down the beanstalk with an axe.
6. In the story it says it was 'giant' and so tall that it went 'right up into the sky and through the clouds'
7. The two things on the table in the castle was a hen and a golden harp.
8. This is a personal response, but examples could say 'I think it was happy for Jack and his mother as Jack got home safely and they now had the hen that laid golden eggs and the magic harp. It was not a happy ending for the giant however as he fell to the ground and was never seen again.'



# Mad Mango Smoothie!

My \_\_\_\_\_, mad mango smoothie is \_\_\_\_\_. It is packed full of \_\_\_\_\_ mangoes and \_\_\_\_\_ bananas. If, you smell it, it smells like \_\_\_\_\_.

When I took the first sip it tasted \_\_\_\_\_ and yummy. It looks so colourful it looks like a \_\_\_\_\_.

The colour of my smoothie is \_\_\_\_\_ and \_\_\_\_\_. If you put your ear up to the smoothie you can hear the bubbles \_\_\_\_\_. In my mouth it tasted \_\_\_\_\_. It was so tasty I wish you could try it!

WHAT CAN I  
SEE?



WHAT CAN I  
HEAR?



WHAT CAN I  
TASTE?



WHAT CAN I  
FEEL?



WHAT CAN I  
SMELL?



--	--	--	--	--

## Make equal groups by sharing

*Example: Share 4 by 2*

*$4 \div 2 = 2$  (I would put a picture of my objects next to my number sentence)*

1. Share 10 by 2
2. Share 8 by 2
3. Share 14 by 2
4. Share 16 by 2
5. Share 10 by 5
6. Share 15 by 5
7. Share 20 by 5
8. Share 20 by 10

## Answers

1.  $10 \div 2 = 5$

2.  $8 \div 2 = 4$

3.  $14 \div 2 = 7$

4.  $16 \div 2 = 8$

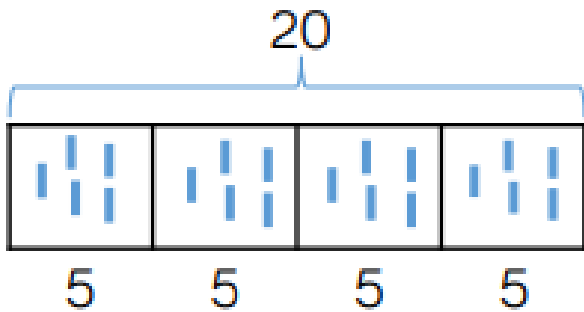
5.  $10 \div 5 = 2$

6.  $15 \div 5 = 3$

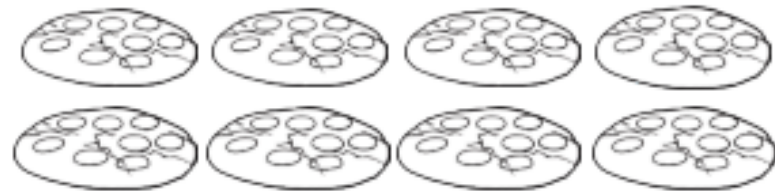
7.  $20 \div 5 = 4$

8.  $20 \div 10 = 2$

# Make equal groups by sharing



a. Share between 2



c. Share between 3

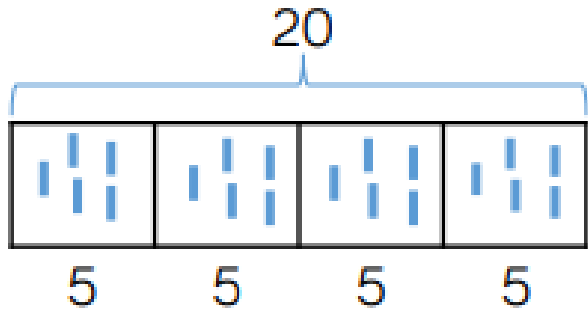


d. Share between 5





# Answers



$$20 \div 4 = 5$$

a. Share between 2



$$8 \div 2 = 4$$

c. Share between 3



$$12 \div 3 = 4$$

d. Share between 5




$$10 \div 5 = 2$$

# Make equal groups - grouping


Put the flowers into groups of 2.

How many groups can you make?




Put the balls into groups of 2.

How many groups can you make?




Put the sheep into groups of 2.

How many groups can you make?



Put the pigs into groups of 2.

How many groups are there?




Put the elephants into groups of 5.

How many groups can you make?




# Answers




$$4 \div 2 = 2$$

$$2 \times 2 = 4$$




$$6 \div 2 = 3$$

$$2 \times 3 = 6$$




$$8 \div 2 = 4$$

$$4 \times 2 = 8$$



$$6 \div 2 = 3$$

$$2 \times 3 = 6$$




$$15 \div 5 = 3$$

$$3 \times 5 = 15$$

# Design a 'British Meal'.

Think about what plants and foods are grown and used in those countries.  
Label each ingredient and explain where it is grown.



# Design a 'Welsh Meal'.

Think about what plants and foods are grown and used in those countries.  
Label each ingredient and explain where it is grown.

